

Problem Set:

Directions: You may use a calculator. You must neatly show your work the same way you were taught in the video.

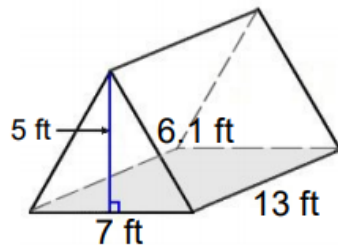
Name:

Date:

Problem Set for

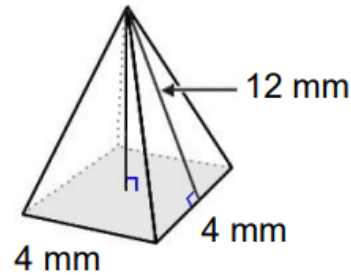
G7 M3 L21+22

1)



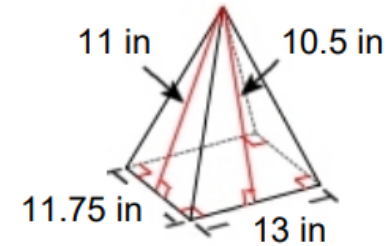
Surface Area: _____

2)



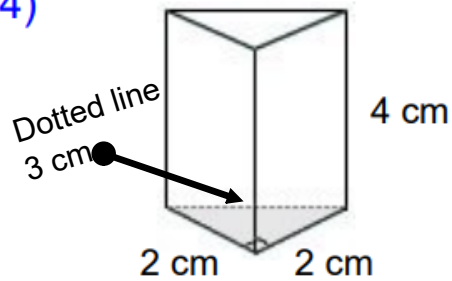
Surface Area: _____

3)



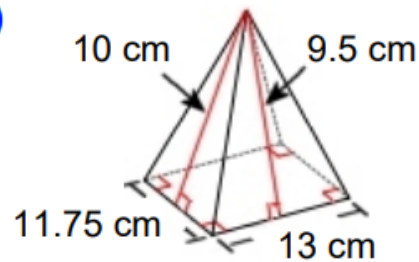
Surface Area: _____

4)



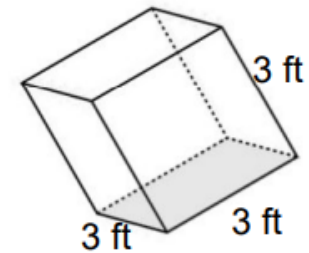
Surface Area: _____

5)



Surface Area: _____

6)



Surface Area: _____

Show all work.