

Exit Ticket

Directions:

- Show your work just like you learned in the video. You will not receive credit if work isn't available.
- You may not work with anyone on this assignment. It's expected you complete this without any help.
- Neatly number and organize your work.
- When you finish, send me a photo of your work.


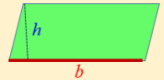

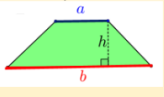
Name: _____

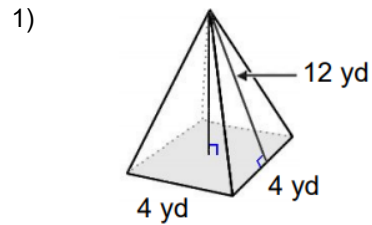
Date: _____

Roster # _____

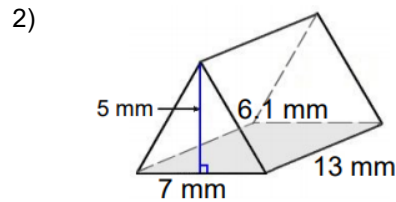
Exit Ticket for G7 M3 L21+22

Area

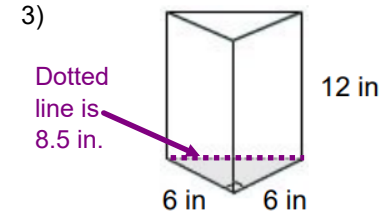
<p>rectangle</p>  <p>$A = bh$</p>	<p>parallelogram</p>  <p>$A = bh$</p>
<p>triangle</p>  <p>$A = \frac{1}{2}bh$</p>	<p>trapezoid</p>  <p>$A = \frac{1}{2}(a+b)h$</p>



Surface Area: _____



Surface Area: _____



Surface Area: _____