


Name \_\_\_\_\_


Date \_\_\_\_\_


## G7 M3 L13 + 14 + 15: Inequalities


## Exit Ticket

For Numbers 1 - 4 solve and graph.

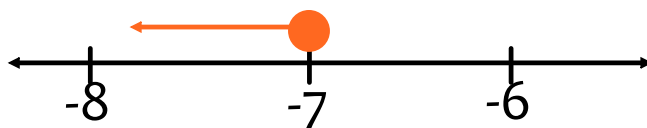
$$1.) 5x \leq -25$$


$$2.) \frac{m}{-3} > 27$$


$$3.) b + 12 > 4$$


$$4.) -27 \geq c - 42$$


5) Use the graph below to write the inequality.



Solution to #5

6) Graph the inequality below on a number line.

$$x > 11$$

