

Grade 7 - Module 3 - Lesson 11

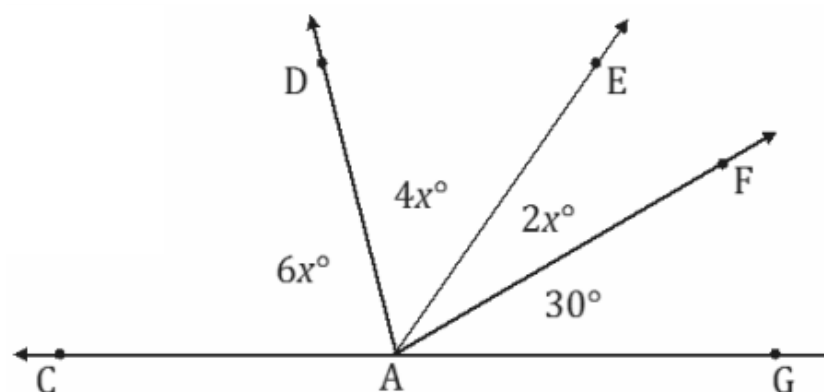
Problem Set Questions

By Mrs. Spronz Assigned on 3/19/20

Number 1:

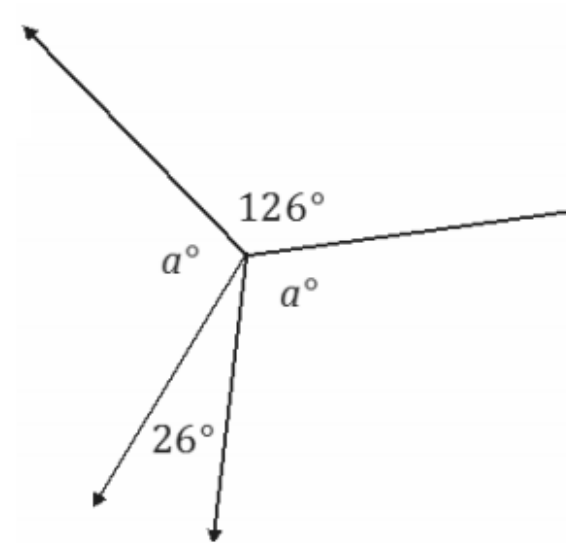
In a complete sentence, describe the angle relationships in each diagram. Write an equation for the angle relationship(s) shown in the figure, and solve for the indicated unknown angle.

1. Find the measures of $\angle EAF$, $\angle DAE$, and $\angle CAD$.



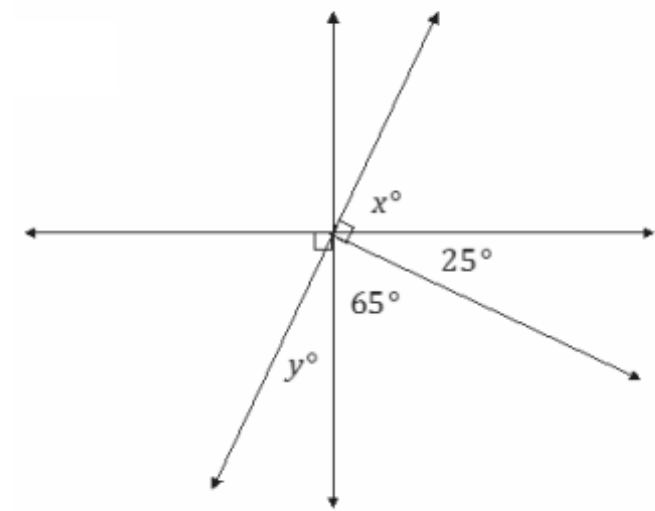
Number 2:

Find the measure of a .



Number 3:

Find the measures of x and y .



Number 4:

Find the measures of $\angle HAB$ and $\angle CAB$.

